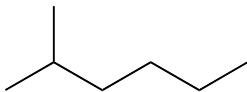


## Recitation Week 5

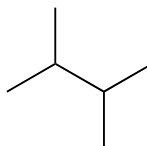
2/13/13

1. Name these alkanes:

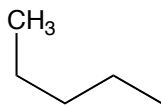
(a)



(b)



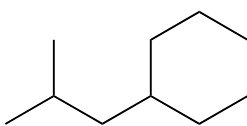
(c)



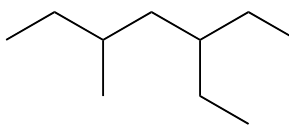
(d)



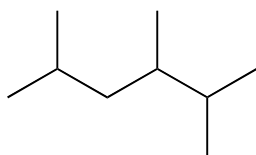
(e)



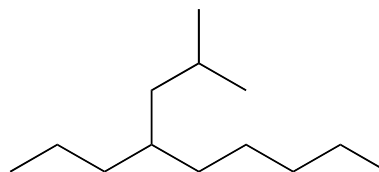
(f)



(g)



(h)



2 Draw the molecules with these names:

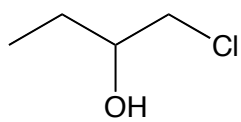
(a) 2-chloro-3,3-dimethyl-1-pentanol

(b) *tert*-butyl alcohol(c) *sec*-butyl bromide

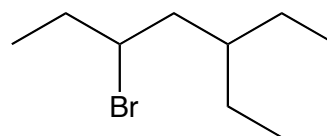
(d) 4-isopropyl-2-methyloctane

3. Name these compounds:

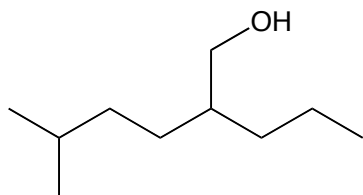
(a)



(b)



(c)



(d)

